

Physics 114 Statistical Mechanics Spring 2018
Seminar 3

Overview:

This week we take on *thermodynamic potentials* or *free energies*. Nature chooses to minimize different types of free energy given different constraints. Free energy is also defined as how much energy in a system is available to do useful work. We derive the functional forms of these free energies: F , G , H , Ω , and see how they are used in practical calculations. By considering the differential forms for these free energies and equating mixed partial derivatives, we derive “Maxwell relations”. Why play this game? Because sometimes one expression, like $(\frac{\partial S}{\partial V})_T$ could never be realized practically in the lab. But the fact that it is equal to $(\frac{\partial P}{\partial T})_V$ makes it the basis of a real experiment: change temperature with volume held fixed; and measure the change in pressure. Partial derivatives like this allow us to define practical quantities like thermal expansivity, bulk moduli, and specific heats.

Required Reading:

G&T Sections

- Chapter 2.21, 2.22, 2.23.2 and 2.24.2

B&B Sections

- Chapter 16
- Chapter 27
- Chapter 18 was assigned last week - but at least in one place, Eq. (18.7), they say “by a Maxwell relation ... ” so look back at this?

Recommended Reading:

- Schroeder’s Sections 5.1 and 5.2 do a nice job with free energies. I’ll put a scan of these, with his free energy Reference data table, in the “Electronic readings and Resources” area of our Moodle site.
- Callen’s Chapters 5, 6 & 7 (Callen is on our seminar bookshelf) go over Legendre transformations, thermodynamic potentials, and Maxwell relations in great detail.


Concept checklist from Readings:

- The idea of *free energy* is subtle; there are a couple of ways to describe free energy, and at first they seem to have nothing to do with each other. G&T tell us that in order to satisfy the first and second law for a *composite* made of system+bath:

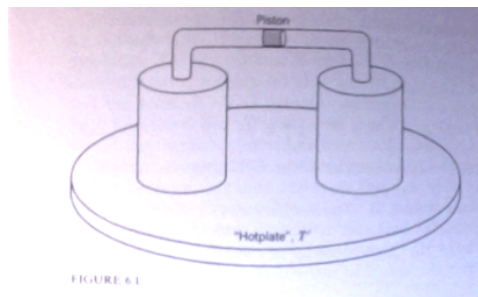
$$\Delta A = \Delta E + P_{bath}\Delta V - T_{bath}\Delta S \leq 0$$

The *availability*, ΔA is the energy *you* have to put in or get out in order to effect a change whose energy cost is ΔE . This is because you create (or destroy if $\Delta E < 0$) this amount of energy in contact with the bath. You provide ΔA and nature provides the rest, thanks to the bath's *spontaneous* actions, in accord with the laws of thermodynamics.

- B&B says something very similar. Say that work δW is done *on* the system ... where this work does not count the compression work $p_{bath}dV$ from the bath, which is written explicitly as a separate term. This work is always more than the change in A : $\delta W \geq dA$. In other words, when you do work *on* the system, *you have to do as much, or more work, than dA* . If there is work done *by* the system, then *the system's free energy will drop at least as much, and perhaps more, than the magnitude of the work it does*: $|\delta W| \leq |dA|$.
- When no work is done on the system, $dA \leq 0$... hence the system *minimizes* its availability. This suggests that availability can also be thought of as a *free energy* ... something that a system minimizes when it is allowed to come to equilibrium.
- The Helmholtz free energy, $F(T, V, N)$ is defined as $F = E - TS$. Here, E and S are averages chosen by the system at equilibrium, and T, V and N are fixed.
- Below is another one of Schroeder's magicians. U is the energy needed to create a rabbit at zero temperature in a vacuum. (Poor rabbit! Don't do it!) But G is the energy that the magician needs to supply to create the rabbit at finite temperature T and pressure P , assuming the rabbit has volume V .



- Yet another way to look at the different free energies: $F(T, V, N)$ is the *Legendre Transform* of $E(S, V, N)$. We know that $T = (\frac{\partial E}{\partial S})_{V, N}$. A Legendre Transform is $f(x) \rightarrow g(m)$ where $g(m) = f(x) - xf'(x)$. Thus $E(S, V, N)$ goes to $E - T(\frac{\partial E}{\partial S})_{V, N}$. We will hopefully get details about of Legendre Transforms in the intro to a problem this week.
- What does it mean for a free energy to be a minimum? If you remove an internal constraint, free energy it will decrease on its way to equilibrium. For example, if T, V , and N are constant, it is F that decreases. If T, P and N are constant, it is G that decreases. Entropy is weird just because of a sign difference: If E, V and N are held constant for a system, S tends to *increase*.
- Here is a good example involving F taken from Callen's Ch. 6: There



are two subsystems, the L and R containers, and they share a bath, which is a hotplate beneath them. The combined volume $V_L + V_R = V$ is fixed. The plug cannot let energy or particles through, but it can move. This is a system with a constant total T, V, N , but it can adjust to have different amounts of V on the left or right. (We could play the game by letting the plug allow particles through instead, so N_L and N_R could adjust, but we won't do it now.) The plug will settle where the pressure between them is equalized: $P_L = P_R$. One can show

that $P = -(\frac{\partial F}{\partial V})_{T,N}$. One can thus argue that $F(T, V, N)$ is minimized when the plug is where it wants to be so the system is in equilibrium. Further, thermodynamic stability demands that also $(\frac{\partial^2 F}{\partial V^2})_{T,N} \geq 0$.

- The Gibbs free energy is $G = \mu N$, where μ is the chemical potential. In other words, μ is the Gibbs free energy per particle. (The generalization to a multicomponent system is also important ... we'll see this later.)
- Chemistry application: Chemical reactions. The sign of $\Delta H(S, P, N)$ tells you if a reaction is exothermic or endothermic. The sign of $\Delta G(T, P, N)$ tells you if a reaction will spontaneously proceed at a certain temperature T in a lab (so P is constant). Schroeder Ch. 5 talks about fuel cells and batteries and we'll do one of his problems on this topic this week. Hopefully, this is practical motivation for the seemingly arcane differences in thermodynamic potentials; all of chemistry and battery/fuel cell engineering depends on them!
- Biochemistry application: Photosynthesis. If this interests you, please see the "Simple Thermodynamic ..." paper listed as Recommended reading.
- *Context is all.* Different free energies are useful for problem doing, and are minimized in different situations, where we hold different thermodynamic variables constant. For example, suppose we want a thermodynamic definition of temperature. Here are two, but the first is for a fixed P and the second for a fixed V system:

$$\left(\frac{\partial H}{\partial S}\right)_P = T \quad ; \quad \left(\frac{\partial U}{\partial S}\right)_V = T$$

- Tables 2.2 in G&T and in section 16.4 of B&B are valuable summaries of how potentials are defined and their differential forms. Important thermodynamics potentials are *Helmholtz free energy* $F(T, V, N) = E - TS$, *Gibbs free energy* $G(T, P, N) = E - TS + PV$ and *enthalpy* $H(S, P, N) = E + PV$. There is also the *Landau potential* $\Omega = F - \mu N = -PV$ which will be less-used in what we do, until we get to Grand Canonical statistics.
- From the free energy definitions come differential forms, for example: $dG = -SdT + VdP + \mu dN$ and $dH = TdS + vdP + \mu dN$.
- From the differential forms of E, F, G, H, S and the fact that these are state functions, come partial derivative relations, for example:

$$S = -\left(\frac{\partial F}{\partial T}\right)_{V,N} \quad ; \quad P = -\left(\frac{\partial F}{\partial V}\right)_{T,N} \quad ; \quad \mu = \left(\frac{\partial F}{\partial N}\right)_{V,T}$$

- By equating *mixed second partial derivatives* of the thermodynamic potentials, we get the so called *Maxwell relations*. Below is the most general form for a Maxwell relation: Φ is a thermodynamic potential. The partials are taken with all other natural variables held constant.

Maxwell relations (general)

$$\frac{\partial}{\partial x_j} \left(\frac{\partial \Phi}{\partial x_i} \right) = \frac{\partial}{\partial x_i} \left(\frac{\partial \Phi}{\partial x_j} \right)$$

Maxwell's relations (common)

$$\begin{aligned}
 + \left(\frac{\partial T}{\partial V} \right)_S &= - \left(\frac{\partial P}{\partial S} \right)_V = \frac{\partial^2 U}{\partial S \partial V} \\
 + \left(\frac{\partial T}{\partial P} \right)_S &= + \left(\frac{\partial V}{\partial S} \right)_P = \frac{\partial^2 H}{\partial S \partial P} \\
 + \left(\frac{\partial S}{\partial V} \right)_T &= + \left(\frac{\partial P}{\partial T} \right)_V = - \frac{\partial^2 F}{\partial T \partial V} \\
 - \left(\frac{\partial S}{\partial P} \right)_T &= + \left(\frac{\partial V}{\partial T} \right)_P = \frac{\partial^2 G}{\partial T \partial P}
 \end{aligned}$$

- Though you can see a table of Maxwell relations below, you should know how to derive them ... memorizing them is annoying. (Chemists sometimes use mnemonics :-) My way is to start with the differential form of a free energy, and take mixed partials as shown above. This is done in example 16.3 of B&B. *Optionally* for people who know about Jacobians, reviewed in B&B Appendix C.9, there is an elegant alternative in the box on B&B p. 181.
- *Thermodynamic response functions* which are also called *generalized susceptibilities* are important. Useful ones are the *expansivity* which tells how volume changes with temperature, the *compressibility* which tells how volume changes with pressure, and *heat capacity* which tells how energy changes with temperature. The *bulk modulus* B is the inverse of compressibility.
- Here are definitions of these response functions:
 - compressibility $\kappa_X = -\frac{1}{V} \left(\frac{\partial V}{\partial P} \right)_X$
 (If $X = T$, this is the “isothermal compressibility”.)

- isobaric volume expansivity $\alpha_P = \frac{1}{V}(\frac{\partial V}{\partial T})_P$
(This is also called “thermal expansion coefficient”. B&B uses symbol β not α .)
- heat capacity: $C_X = T(\frac{\partial S}{\partial T})_X$

Maxwell relations help us derive relationships between thermodynamic response functions.

- What happens to a real gas during different kinds of expansions or contractions? This is the subject of G&T 2.23.1 (in last week’s reading, and the subject of a problem we did: G&T Problem 2.29) and also G&T 2.23.2 and B&B Ch. 27. We find out about three key cases:
 - **Free expansion:** Irreversible! Constant energy, but the temperature can change. It does this in a way controlled by the *Joule coefficient* μ_J . (It looks like a constant, but in general coefficients like this, like specific heats, are functions of T .) Its definition is: $\mu_J = -\frac{1}{C_V}((\frac{\partial P}{\partial T})_V - P)$ and it is the case that $\Delta T = \int_{V_1}^{V_2} \mu_J dV$.
 - **Isothermal expansion:** Reversible! Constant temperature, but the energy can change. Again the story is told by μ_J . B&B Eq. (27.11) can be rewritten as $\Delta U = -C_V \int_{V_1}^{V_2} \mu_J dV$.
 - **Joule-Kelvin expansion:** Irreversible! Constant enthalpy, but the entropy and temperature can change. Now the story is told by the *Joule-Kelvin coefficient* μ_{JK} . Its definition is: $\mu_{JK} = \frac{1}{C_P}((\frac{\partial V}{\partial T})_P - V)$ and it is the case that $\Delta T = \int_{V_1}^{V_2} \mu_{JK} dP$.
- *Note about the real world:* The Joule-Kelvin process is also known as “Joule-Thompson” or a “throttling process” b/c it happens when you push a fluid through a porous plug, or a narrow aperture known as a “throttle valve”. The point is to obstruct the flow. In a car engine, the throttle is a valve that directly adjusts the amount of air entering the engine, controlling the fuel+air ratio, giving more or less power to the engine via the burning fuel. Throttling is important for liquifying gases for research, and also important to refrigeration and air conditioning systems. The circulating refrigerant is at medium temperature and high pressure when then it enters the throttling valve. Passing through the throttling valve, the pressure and the temperature of the refrigerant are reduced drastically. Afterward, it is able to do the necessary cooling within the fridge or room.
- The *Joule-Kelvin* process is a constant-enthalpy process. $H_{P \text{ high}} = H_{P \text{ low}}$ on the two sides of the porous plug or narrow throttle valve through which gas is being pushed from high to low pressure. While in a free expansion, we seek $(\partial T/\partial V)_E$, in throttling we want $(\partial T/\partial P)_H$. These are both equal to zero for an ideal gas - not so for a non-ideal gas.

The Maxwell relations prove their utility by showing that the temperature may rise or fall depending on the size of the volume expansivity α . Please be sure you follow the argument leading to $T\alpha \geq 1$ implying the temperature *drops* for the gas during throttling.

- We define an *inversion temperature* T_{inv} , below which a real gas cools when it is throttled, and above which it warms. The Joule Kelvin coefficient, $\mu_{JK}(T)$, changes sign at that temperature: $\mu_{JK}(T_{inv}) = 0$

ΔH	ΔS	Description of process
>0	>0	Endothermic, spontaneous for $T > \Delta H/\Delta S$
<0	<0	Exothermic, spontaneous for $T < \Delta H/\Delta S$
<0	>0	Exothermic, spontaneous for all T
>0	<0	Never spontaneous

Warmup Problem: Due before seminar, Monday at 5 pm or at latest Tues at noon

1: Maxwell Relations The isobaric thermal expansion coefficient is called α in G&T and β in B&B. Whatever!

a) Use a Maxwell relation together with the third law of thermodynamics to show that $\alpha \rightarrow 0$ as $T \rightarrow 0$.

b) Please give a (brief!) derivation of the Maxwell relation which you used in part a).

Presentation: Legendre transforms

Tell us what is being “transformed”. Give us an example. Drawing graphs (a function, its slope, its transform ...) will be super. Tell us how these transforms are used in thermodynamics and give us an example of some thermodynamic potentials which are Legendre transforms of each other.

Regular problems

1: Enthalpy is a free energy G&T problem 2.65

2: Change in Gibbs free energy with temperature You have a piston at $72^\circ F$ with 10^{-2} mole of Argon gas inside. If you keep the pressure constant at $P = 1 \text{ atm}$ but raise its temperature to $90^\circ F$, how much does its Gibbs free energy change? (You can use the value for S given in Schroeder’s data table pp. 404-405.) If you wanted to keep its temperature at $90^\circ F$ but change the Gibbs free energy back to the original value by changing its pressure, what would the final pressure be?

3: Legendre transforms G&T problem 2.32

4: The Landau potential G&T problem 2.66

5: Helmholtz free energy of hydrogen (Schroeder problem 5.20)

The first excited energy level of a hydrogen atom has an energy of 10.2 eV , if we take the ground state energy to be zero. However, the first excited state is really four independent states all with the same energy. We can assign it (as we'll see very soon in seminar) as having entropy $S = k \ln 4$. For what temperatures is the Helmholtz free energy of a hydrogen atom in the first excited state positive, and for what temperatures is it negative? (Why is this useful? When F is negative, the atom will spontaneously go from the ground state, where $F \equiv 0$, into that level ... since the natural direction toward equilibrium is that F tends toward its minimum value. Of course, for a system this small - only five states - , random fluctuations could be significant.)

6: Thermodynamic identities for compressibility G&T problem 2.68

7: Using Maxwell relations to describe expansions B&B problem 16.2

8: Helmholtz and Gibbs:

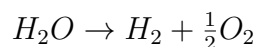
a) The Helmholtz F and Gibbs G free energies are two important thermodynamic potentials. Each of these is minimized by a system under certain circumstances - what are these circumstances?

b) Each of F and G represent “available work”, so which one is preferable to use for

i) calculating the energy needed to materialize a rabbit on a table ?

ii) finding the chemical potential μ ?

iii) determining if the following chemical reaction will go at a temperature of 500K ?



c) Please say which potential is best to use, and then use it to solve this problem: *A cylinder contains an internal piston on each side of which is one mole of a monatomic ideal gas. The cylinder walls are diathermal, and the system is immersed in a heat reservoir at temperature 0°C . The initial volumes of the two gaseous subsystems (on either side of the piston) are 10 L and 1 L , respectively. The piston is now moved reversibly, so that*

the final volumes are 6 L and 5 L, respectively. How much work is delivered?

9: Liquifying helium: B&B 27.2